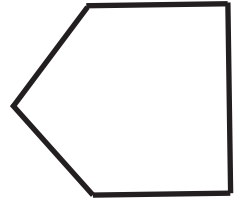
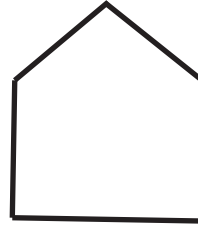
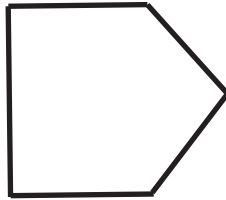
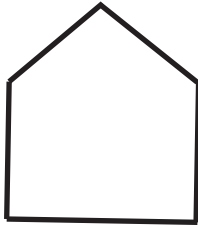


10. Pattern A is created by repeating the 4 terms below in order.

Pattern A



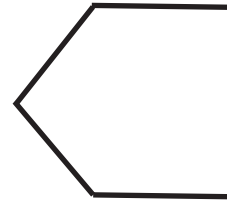

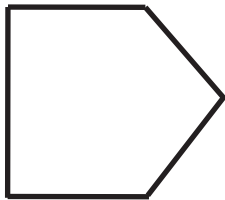
Term number 1

2

3

4

Pattern B is created by repeating the 3 terms below in order.



Term number 1

2

3

Find a term in both patterns that is the same and has the same term number.

Show your work.